

4. Start Time




Elapsed Time

5:10

End Time?

5. Start Time




Elapsed Time

10:50

End Time?

6. Start Time



Elapsed Time

9:50

End Time?

ANSWER KEY

4. Start Time




Elapsed Time

5:10

End Time?

8:00

5. Start Time



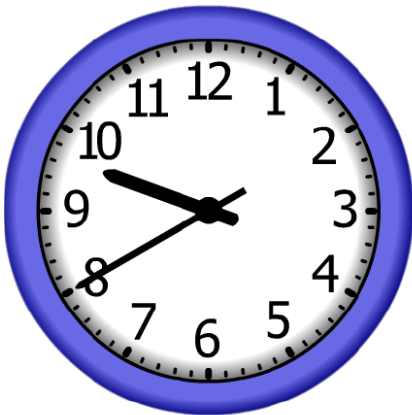
Elapsed Time

10:50

End Time?

9:10

6. Start Time



Elapsed Time

9:50

End Time?

7:30