


4. Start Time




Elapsed Time

4:10

End Time?

5. Start Time




Elapsed Time

6:00

End Time?

6. Start Time



Elapsed Time

11:30

End Time?

ANSWER KEY

4. Start Time



Elapsed Time

4:10

End Time?

4:40

5. Start Time




Elapsed Time

6:00

End Time?

3:20

6. Start Time



Elapsed Time

11:30

End Time?

2:20