

Name: _____ Date: _____

1. Start Time




Elapsed Time

9:30

End Time?

2. Start Time




Elapsed Time

8:00

End Time?

3. Start Time



Elapsed Time

2:00

End Time?

ANSWER KEY

1. Start Time




Elapsed Time

9:30

End Time?

5:15

2. Start Time




Elapsed Time

8:00

End Time?

8:30

3. Start Time



Elapsed Time

2:00

End Time?

3:30