


4. Start Time




Elapsed Time

**0:45**

End Time?

5. Start Time




Elapsed Time

**6:30**

End Time?

6. Start Time



Elapsed Time

**5:45**

End Time?

# ANSWER KEY

4. Start Time




Elapsed Time

**0:45**

End Time?

**9:00**

5. Start Time




Elapsed Time

**6:30**

End Time?

**9:45**

6. Start Time



Elapsed Time

**5:45**

End Time?

**7:30**