

Name: _____ Date: _____

1. Start Time




Elapsed Time

2:45

End Time?

2. Start Time

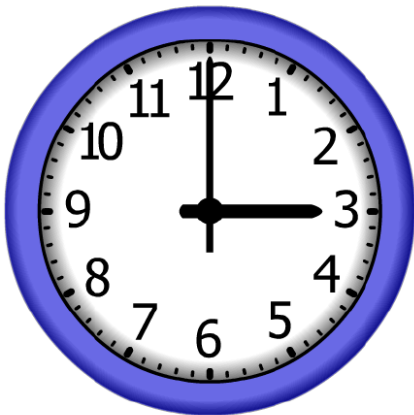


Elapsed Time

0:45

End Time?

3. Start Time



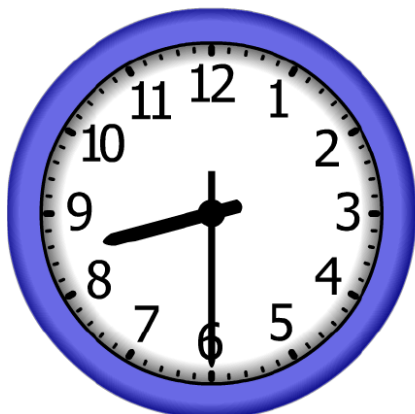
Elapsed Time

7:00

End Time?

ANSWER KEY

1. Start Time




Elapsed Time

2:45

End Time?

11:15

2. Start Time



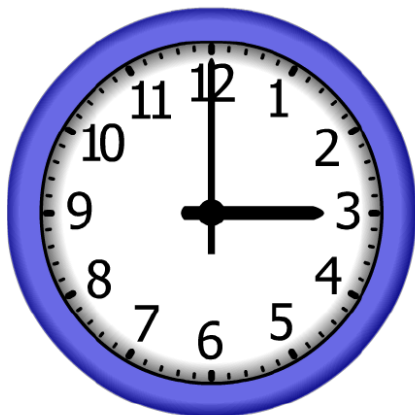
Elapsed Time

0:45

End Time?

2:45

3. Start Time



Elapsed Time

7:00

End Time?

10:00