


4. Start Time




Elapsed Time

1:30

End Time?

5. Start Time



Elapsed Time

6:30

End Time?

6. Start Time




Elapsed Time

4:30

End Time?

ANSWER KEY

4. Start Time




Elapsed Time

1:30

End Time?

4:00

5. Start Time




Elapsed Time

6:30

End Time?

6:00

6. Start Time



Elapsed Time

4:30

End Time?

3:30