


4. Start Time



Elapsed Time

**4:30**

End Time?

5. Start Time




Elapsed Time

**7:30**

End Time?

6. Start Time



Elapsed Time

**11:00**

End Time?

# ANSWER KEY

4. Start Time



Elapsed Time

**4:30**

End Time?

**3:00**

5. Start Time




Elapsed Time

**7:30**

End Time?

**2:00**

6. Start Time



Elapsed Time

**11:00**

End Time?

**10:00**