

1. Start Time




Elapsed Time

9:00

End Time?

2. Start Time




Elapsed Time

11:50

End Time?

3. Start Time



Elapsed Time

4:10

End Time?

ANSWER KEY

1. Start Time




Elapsed Time

9:00

End Time?

2:55

2. Start Time




Elapsed Time

11:50

End Time?

3:50

3. Start Time



Elapsed Time

4:10

End Time?

3:10