

4. Start Time




Elapsed Time

7:40

End Time?

5. Start Time

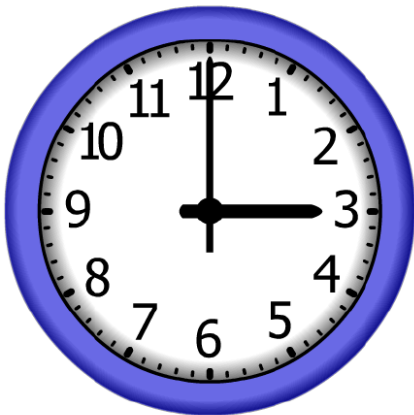


Elapsed Time

10:55

End Time?

6. Start Time



Elapsed Time

3:35

End Time?

ANSWER KEY

4. Start Time




Elapsed Time

7:40

End Time?

10:45

5. Start Time




Elapsed Time

10:55

End Time?

12:25

6. Start Time



Elapsed Time

3:35

End Time?

6:35