

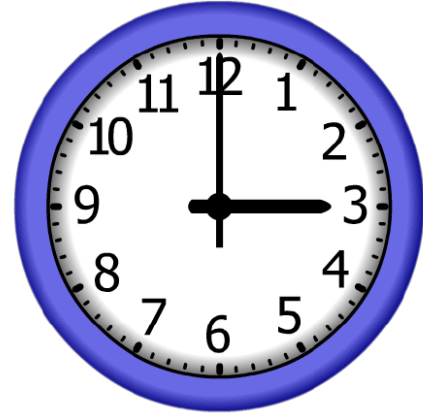
Name: _____ Date: _____

1.

Start Time?

Elapsed Time

End Time




2.

Start Time?

Elapsed Time

End Time



3.

Start Time?

Elapsed Time

End Time



ANSWER KEY

1.

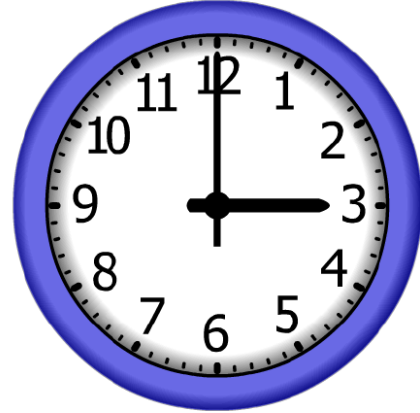
Start Time?

6:00

Elapsed Time

9:00

End Time



2.


Start Time?

8:00

Elapsed Time

6:00

End Time



3.

Start Time?

9:00

Elapsed Time

2:00

End Time

