

4.

Start Time?

Elapsed Time

End Time




5.

Start Time?

Elapsed Time

End Time




6.

Start Time?

Elapsed Time

End Time



ANSWER KEY

4.


Start Time?

11:54

Elapsed Time

9:56

End Time



5.


Start Time?

5:44

Elapsed Time

9:13

End Time



6.

Start Time?

11:15

Elapsed Time

2:16

End Time

