

4.

Start Time?

Elapsed Time

3:50

End Time



5.

Start Time?

Elapsed Time

7:40

End Time




6.

Start Time?

Elapsed Time

2:50

End Time



ANSWER KEY

4.


Start Time?

12:30

Elapsed Time

3:50

End Time



5.


Start Time?

8:50

Elapsed Time

7:40

End Time



6.

Start Time?

4:40

Elapsed Time

2:50

End Time

