


4.

Start Time?

Elapsed Time

End Time



5.

Start Time?

Elapsed Time

End Time




6.

Start Time?

Elapsed Time

End Time



ANSWER KEY

4.


Start Time?

4:00

Elapsed Time

5:30

End Time



5.

Start Time?

9:15

Elapsed Time

1:45

End Time



6.

Start Time?

2:45

Elapsed Time

7:45

End Time

