


Name: _____ Date: _____

1.

Start Time?

Elapsed Time

End Time




2.

Start Time?

Elapsed Time

End Time




3.

Start Time?

Elapsed Time

End Time



ANSWER KEY

1.

Start Time?

3:30

Elapsed Time

4:00

End Time



2.


Start Time?

11:00

Elapsed Time

6:00

End Time



3.

Start Time?

12:00

Elapsed Time

3:30

End Time

