


4.

Start Time?

Elapsed Time

End Time



5.

Start Time?

Elapsed Time

End Time




6.

Start Time?

Elapsed Time

End Time



ANSWER KEY

4.


Start Time?

6:15

Elapsed Time

7:40

End Time



5.

Start Time?

4:40

Elapsed Time

0:40

End Time



6.

Start Time?

10:25

Elapsed Time

5:20

End Time

